

# GCSE Geography Homework Year 10 - Term 5 LIC/ NEE Urban Case Study: Rio



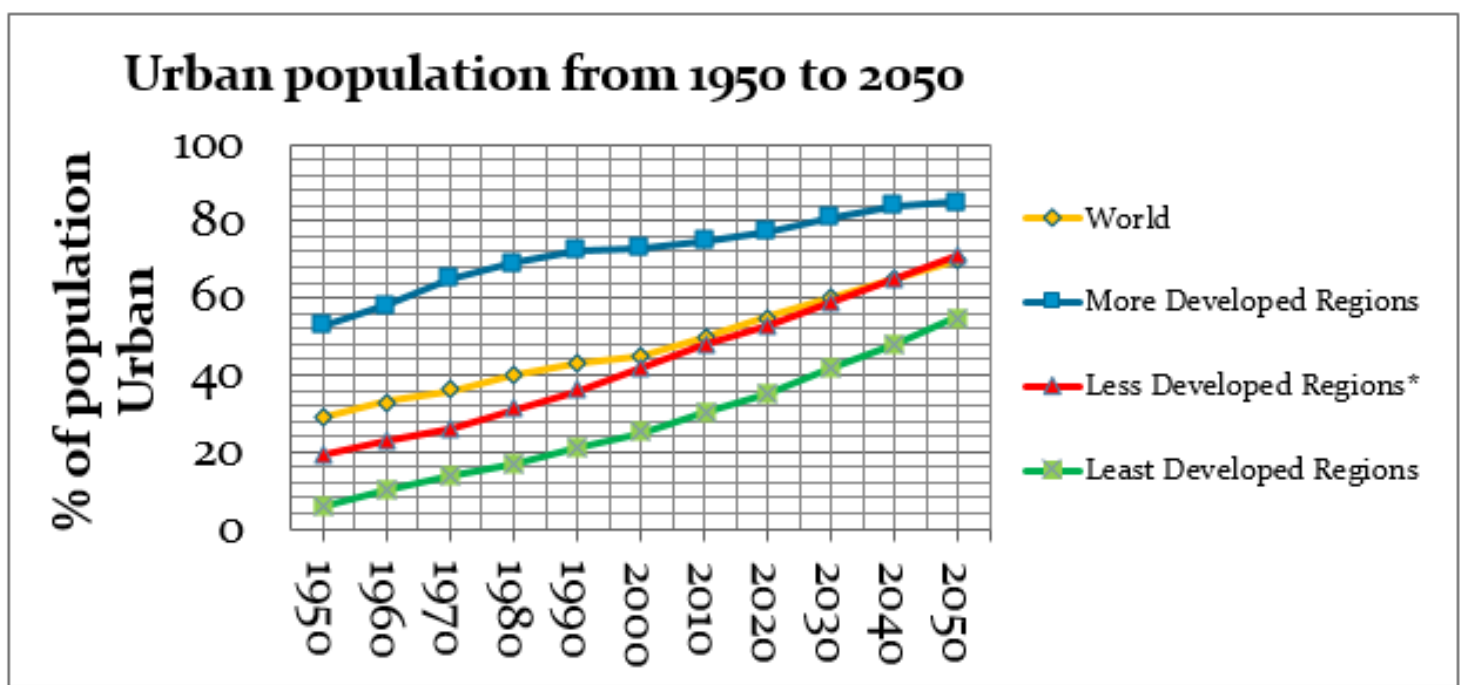
Due Date	Knowledge Organiser Revision	Task
<b>Tuesday 16<sup>th</sup> April</b>	<b>Rio de Janerio</b>	<u>Revision:</u> 1.           Megacities
<b>Tuesday 23<sup>rd</sup> April</b>		<u>Revision:</u> 1.           Migration to Rio
<b>Tuesday 30<sup>th</sup> April</b>		<u>Revision:</u> 1.           Importance of Rio
<b>Tuesday 7<sup>th</sup> May</b>		<u>Revision:</u> 1.           Employment in Rio
<b>Tuesday 14<sup>th</sup> May</b>		<u>Revision:</u> 1.           Environmental Challenges
<b>Tuesday 21<sup>st</sup> May</b>		<u>Revision:</u> 1.           Favelas
<b>Tuesday 4<sup>th</sup> June</b>		

Due Date:	Tuesday 16 <sup>th</sup> April
Student Number:	
Name:	

Q1) Define the key terms below:

Key word	Definition
Urbanisation	
Megacity	
Pull Factor	This is where people are drawn to an urban area.
Push Factor	This is where people are forced away from their homes.
Rural-urban migration	
Natural Increase	

Q2) Compare the rates of urbanisation for different regions around the world. (4 marks).



---

---

---

---

Q3) Outline two reasons for why the largest rates of urbanisation will happen in LICs and NEEs (4 marks)

1.

---

---

2.

---

---

Q4) Identify the push and pull factors in the table below.

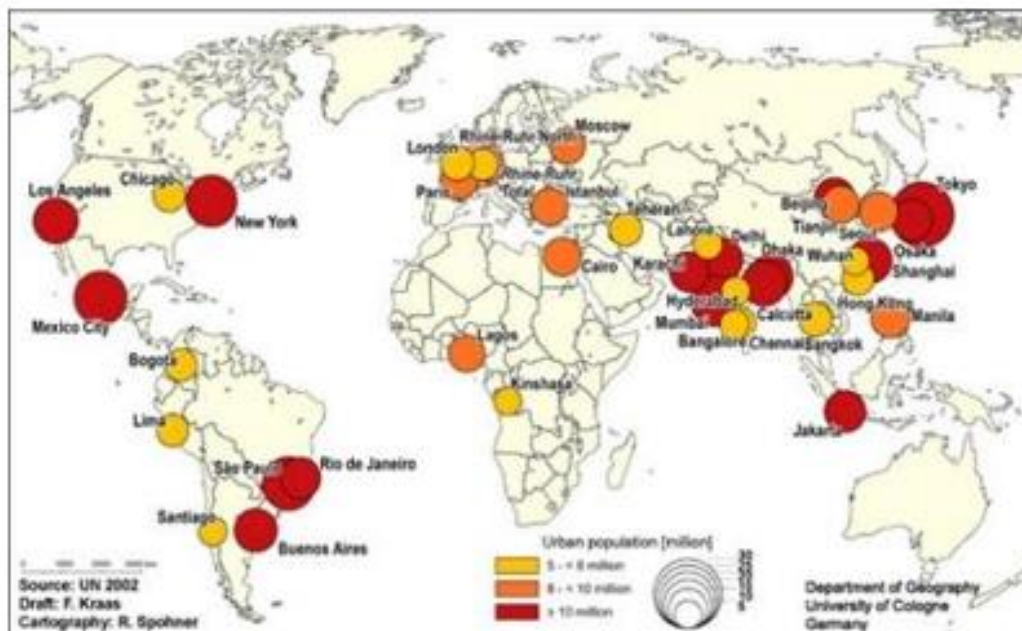
Jobs	Famine
Natural Disaster.	Education
Poverty	Healthcare
Services	Famine

Due Date:	Tuesday 23 <sup>rd</sup> April
Student Number:	
Name:	

Q1) Define the key terms below:

Megacity	
LIC	
NEE	

Q2) Study the figure. It is showing the location of the largest cities in the world.



Describe the distribution of the megacities over the world (cities with a population of over 10 million people). (4 marks)

---



---



---



---



Due Date:	Tuesday 30 <sup>th</sup> April
Student Number:	
Name:	

The table below is the importance of Rio de Janeiro.

Regional importance	National importance	Global importance
Manufacturing of chemicals and clothing.	Brazil's second most important centre.	Major international tourist destination.
Main service industries are banking, finance and insurance.	A major port for export of coffee and sugar.	Hosted the Olympic games and the World Cup.

1. Using a LIC/NEE case study, explain why it is an important global city (4 marks).

---

---

---

---

---

---

2. Using a LIC/NEE case study, explain why it is nationally important (4 marks).

---

---

---

---

---

---

3. To what extent have the social challenges in Rio been resolved. 9 marks.

P1: \_\_\_\_\_  
\_\_\_\_\_  
\_\_\_\_\_  
\_\_\_\_\_  
\_\_\_\_\_  
\_\_\_\_\_

P2 \_\_\_\_\_  
\_\_\_\_\_  
\_\_\_\_\_  
\_\_\_\_\_  
\_\_\_\_\_  
\_\_\_\_\_  
\_\_\_\_\_

P3 \_\_\_\_\_  
\_\_\_\_\_  
\_\_\_\_\_  
\_\_\_\_\_  
\_\_\_\_\_  
\_\_\_\_\_  
\_\_\_\_\_

Conclusion: \_\_\_\_\_  
\_\_\_\_\_  
\_\_\_\_\_  
\_\_\_\_\_

Due Date:	Tuesday 7 <sup>th</sup> May
Student Number:	
Name:	

Key word	Definition
Formal employment	
Informal employment	

a. Suggest two disadvantages of informal jobs (4 marks)

1. \_\_\_\_\_  
\_\_\_\_\_  
\_\_\_\_\_

2. \_\_\_\_\_  
\_\_\_\_\_  
\_\_\_\_\_

b. Outline two things the Brazilian government are doing to reduce infant mortality. (4 marks)

1. \_\_\_\_\_  
\_\_\_\_\_  
\_\_\_\_\_

2. \_\_\_\_\_  
\_\_\_\_\_  
\_\_\_\_\_





Due Date:	Tuesday 14 <sup>th</sup> May
Student Number:	
Name:	

## Rio's Environmental challenges

- **Urban sprawl** - this is an issue as the city continues to grow rapidly, encroaching on surrounding rural (countryside) areas.
- **Pollution** - from traffic congestion in the city centre, and from industrial zones. Litter is an issue on the beaches.
- **Waste disposal** - a particular problem in the favelas, where there is no organised sewage or waste recovery systems.

Q1) Describe the impacts of urban sprawl on Rio and surrounding environment (2 marks) |

---

---

---

---

Q2) Describe two environmental challenges that Rio faces (4 marks)

---

---

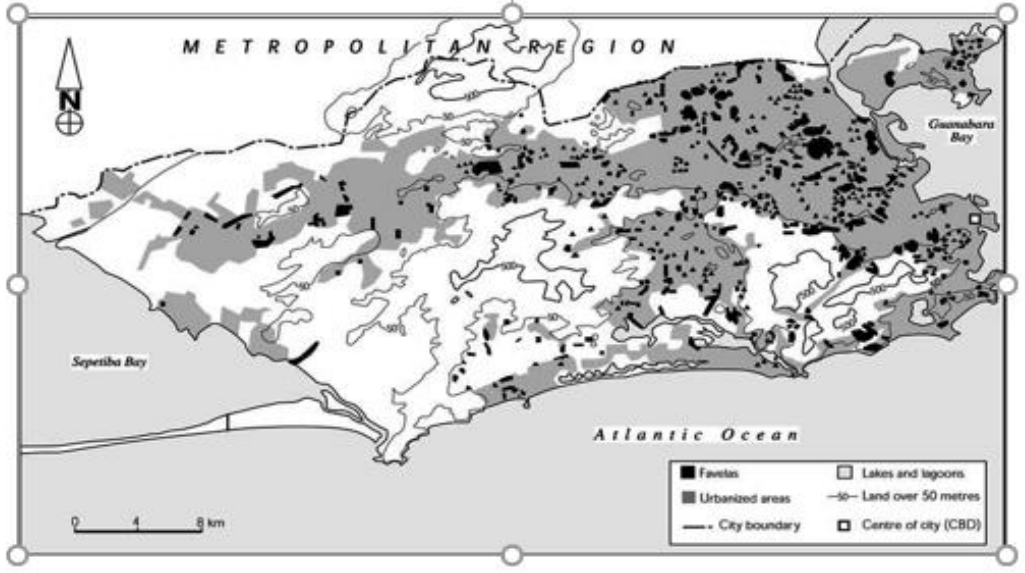
---

---



Due Date:	Tuesday 21 <sup>st</sup> May
Student Number:	
Name:	

Q1) Study the figure below showing the location of favelas in Rio de Janeiro.



Describe the distribution of Rio's favelas (4 marks)

---



---



---



---

Q17) Outline the main challenges for people living in squatter settlements (6 marks)

---



---



---



---



---



